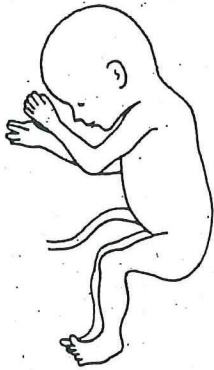



**ACTIVITY** ■ Reproduction and Development

**Stages of Human Development**

1. The pictures below show various stages in the development of a human baby. An embryo is formed from a fertilized egg that divides many, many times. The embryo develops into a fetus. Eventually, a baby is born. Can you put these pictures in order from fertilization to birth? Put a 1 below the picture that comes first, a 2 below the picture that comes next, and so on.



a. \_\_\_\_\_



d. \_\_\_\_\_



f. \_\_\_\_\_



i. \_\_\_\_\_



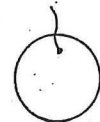
b. \_\_\_\_\_



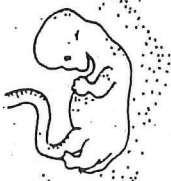
e. \_\_\_\_\_



g. \_\_\_\_\_



j. \_\_\_\_\_



c. \_\_\_\_\_



h. \_\_\_\_\_



k. \_\_\_\_\_